



basic education

Department:
Basic Education
REPUBLIC OF SOUTH AFRICA

NATIONAL SENIOR CERTIFICATE

GRADE 11

PHYSICAL SCIENCES: PHYSICS (P1)

NOVEMBER 2019

MARKS: 150

TIME: 3 hours

This question paper consists of 14 pages and 2 data sheets.



INSTRUCTIONS AND INFORMATION

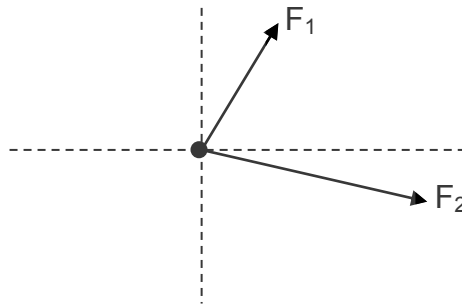
1. Write your name and class (e.g. 11A) in the appropriate spaces on the ANSWER BOOK.
2. This question paper consists of TEN questions. Answer ALL the questions in the ANSWER BOOK.
3. Start EACH question on a NEW page in the ANSWER BOOK.
4. Number the answers correctly according to the numbering system used in this question paper.
5. Leave ONE line between two subquestions, e.g. between QUESTION 2.1 and QUESTION 2.2.
6. You may use a non-programmable calculator.
7. You may use appropriate mathematical instruments.
8. You are advised to use the attached DATA SHEETS.
9. Show ALL formulae and substitutions in ALL calculations.
10. Round off your FINAL numerical answers to a minimum of TWO decimal places.
11. Give brief motivations, discussions, etc. where required.
12. Write neatly and legibly.



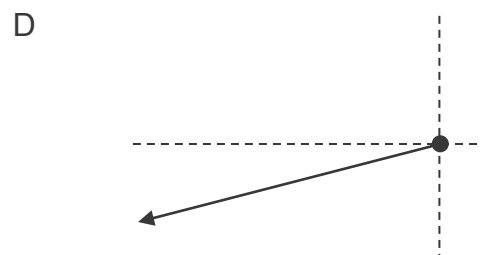
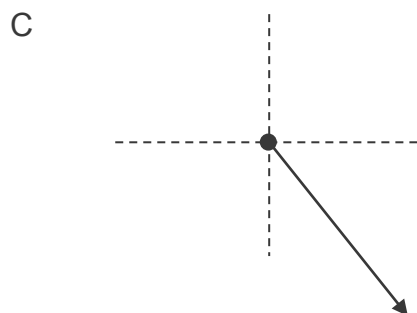
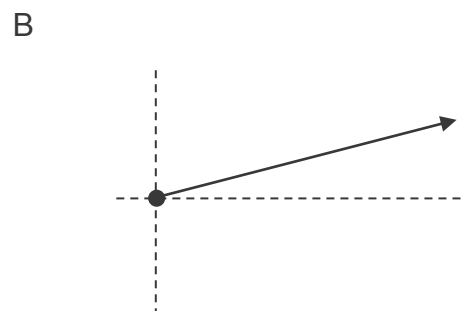
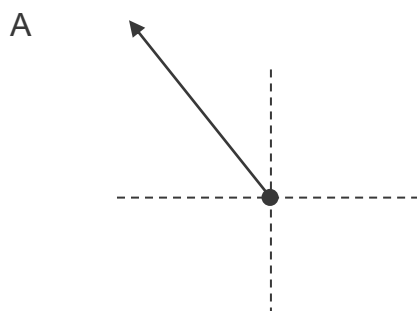
QUESTION 1: MULTIPLE-CHOICE QUESTIONS

Various options are provided as possible answers to the following questions. Choose the answer and write only the letter (A–D) next to the question numbers (1.1 to 1.10) in the ANSWER BOOK, e.g. 1.11 E. Each question has only ONE correct answer.

- 1.1 Two forces, F_1 and F_2 , act simultaneously at a point in the directions as shown in the sketch below.



Which ONE of the following represents the resultant of the two forces?



(2)

1.2 Which ONE of the following statements regarding inertia of an object is CORRECT?

The inertia of an object ...

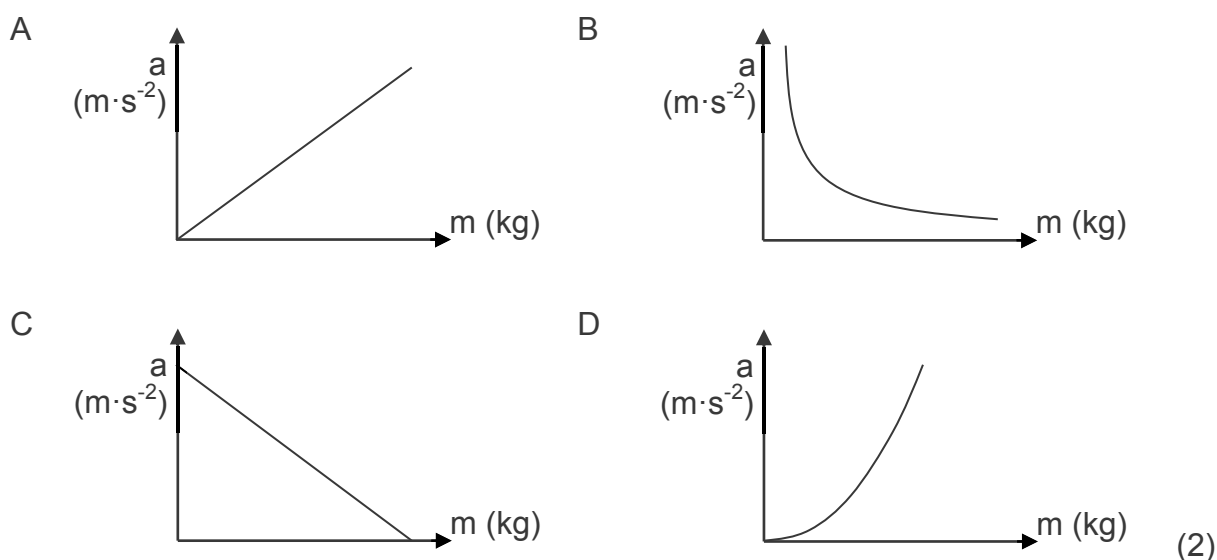
- A is greater if its mass is smaller.
- B increases as the applied force on the object increases.
- C is the resistance to any change in its state of motion.
- D increases as the frictional force on the object increases.

1.3 Which ONE of the following statements regarding the frictional force acting on an object is CORRECT?

The frictional force is ...

- A directly proportional to the normal force.
- B dependent on the velocity of the motion.
- C independent of the type of surface.
- D equal to the weight of the object. (2)

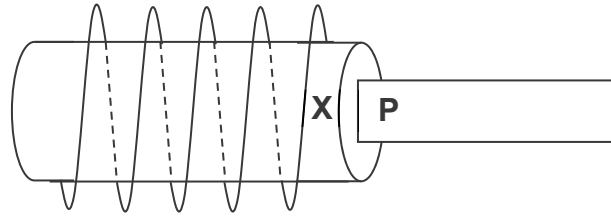
1.4 Which ONE of the following graphs represents the relationship between acceleration and mass of an object if a constant net force acts on it?



- 1.5 According to Newton's Third Law of Motion, the reaction force to the weight of a book lying on a table is the ...
- A normal force.
 - B force of the book on Earth.
 - C force of Earth on the book.
 - D force of the book on the table. (2)
- 1.6 The measure of the refractive power of a medium is called the ...
- A refractive index.
 - B optical density.
 - C refraction.
 - D speed of light in the medium.
- 1.7 A central bright band is observed when light of wavelength λ travels through a slit of width w .
- Light of wavelength 2λ is now used. A central bright band of the SAME broadness will be produced if the slit width used is ...
- A w
 - B $\frac{1}{2}w$
 - C $\frac{1}{4}w$
 - D $2w$ (2)
- 1.8 The electric field at a point is defined as ...
- A the region in space where an electric charge experiences an electrostatic force.
 - B the electrostatic force per unit positive charge.
 - C directly proportional to the product of the charges.
 - D the direction that a negative test charge would move. (2)



- 1.9 The diagram below shows a coil and a magnet with a pole, **P**. A magnetic field is induced in the coil due to the motion of the magnet.

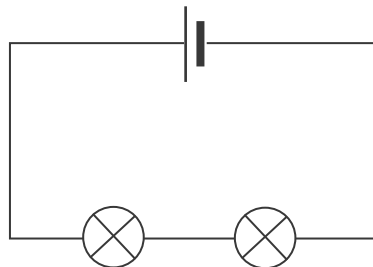


Which ONE of the following combinations will result in an induced magnetic field with a NORTH POLE at point **X**?

	DIRECTION OF MOTION OF MAGNET	POLARITY OF P
A	Into the coil	North
B	Up and down inside the coil	North
C	Into the coil	South
D	Up and down inside the coil	South

(2)

- 1.10 The cell in the circuit below delivers a potential difference of 1,5 V. The bulbs are identical and the current in the circuit is 0,2 A.



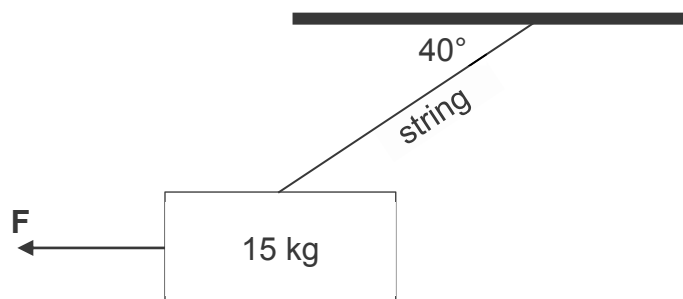
The energy, in joule, transferred by ONE of the bulbs in one minute is ...

- A $1,5 \times 0,2 \times 1$
 B $1,5 \times 0,2 \times 60$
 C $0,75 \times 0,2 \times 1$
 D $0,75 \times 0,2 \times 60$

(2)
[20]

QUESTION 2 (Start on a new page.)

A billboard, mass 15 kg, is suspended from a roof by means of a light inextensible string. Force **F** pulls the billboard sideways, as shown in the diagram below.

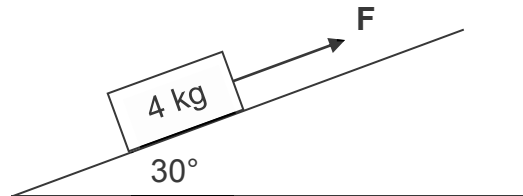


When the angle between the roof and the string is 40° , a closed vector diagram is obtained for all the forces acting on the billboard.

- 2.1 What deduction can be made when the forces acting on an object forms a closed vector diagram? (2)
- 2.2 Calculate the weight of the billboard. (2)
- 2.3 Draw a labelled closed vector diagram of ALL the forces acting on the billboard. Indicate the value of ONE of the angles. (4)
- 2.4 Calculate the tension in the string. (2)
- 2.5 The magnitude of force **F** is equal to the magnitude of the horizontal component of the tension in the string.
- Give a reason why these two forces are NOT considered to be an action-reaction pair according to Newton's Third Law. (1)
- [11]**

QUESTION 3 (Start on a new page.)

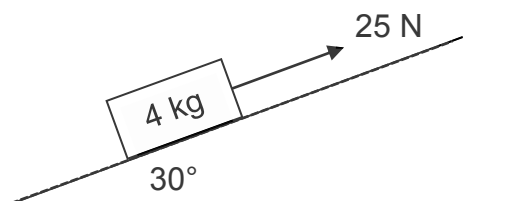
A 4 kg block is pulled up along a frictionless incline by a constant force **F** acting parallel to the incline, as shown below. The incline makes an angle of 30° with the horizontal. The block moves at **CONSTANT VELOCITY**.



- 3.1 State *Newton's First Law of Motion* in words. (2)
- 3.2 Draw a labelled free-body diagram showing all the forces acting on the block. (3)
- 3.3 Calculate the magnitude of:
- 3.3.1 The perpendicular component of the weight of the block (3)
- 3.3.2 Force **F** (3)

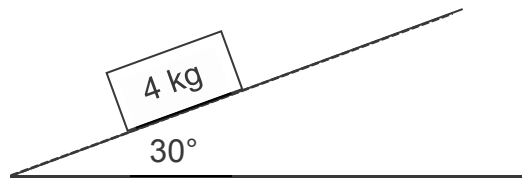
The same block is now pulled up along a rough incline by a constant force of 25 N acting parallel to the incline, as shown below. The incline makes an angle of 30° with the horizontal.

The acceleration of the block is now $0,2 \text{ m}\cdot\text{s}^{-2}$ upwards along the incline.



- 3.4 Calculate the:
- 3.4.1 Magnitude of the kinetic frictional force acting on the block (4)
- 3.4.2 Coefficient of kinetic friction between the block and the surface of the incline (3)

The force of 25 N acting on the block on the rough incline is now removed, as shown below.

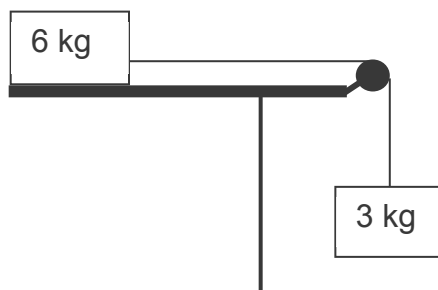


3.5 How will EACH of the following quantities change in MAGNITUDE and DIRECTION?

- | | | |
|-------|--|-----|
| 3.5.1 | Weight of the block | (2) |
| 3.5.2 | Acceleration of the block | (2) |
| 3.5.3 | Kinetic frictional force acting on the block | (2) |
- [24]**

QUESTION 4 (Start on a new page.)

A 6 kg block, held at rest on a rough horizontal table, is connected to another block of mass 3 kg by a light inextensible string passing over a frictionless pulley. The 3 kg block hangs vertically, as shown in the diagram below.



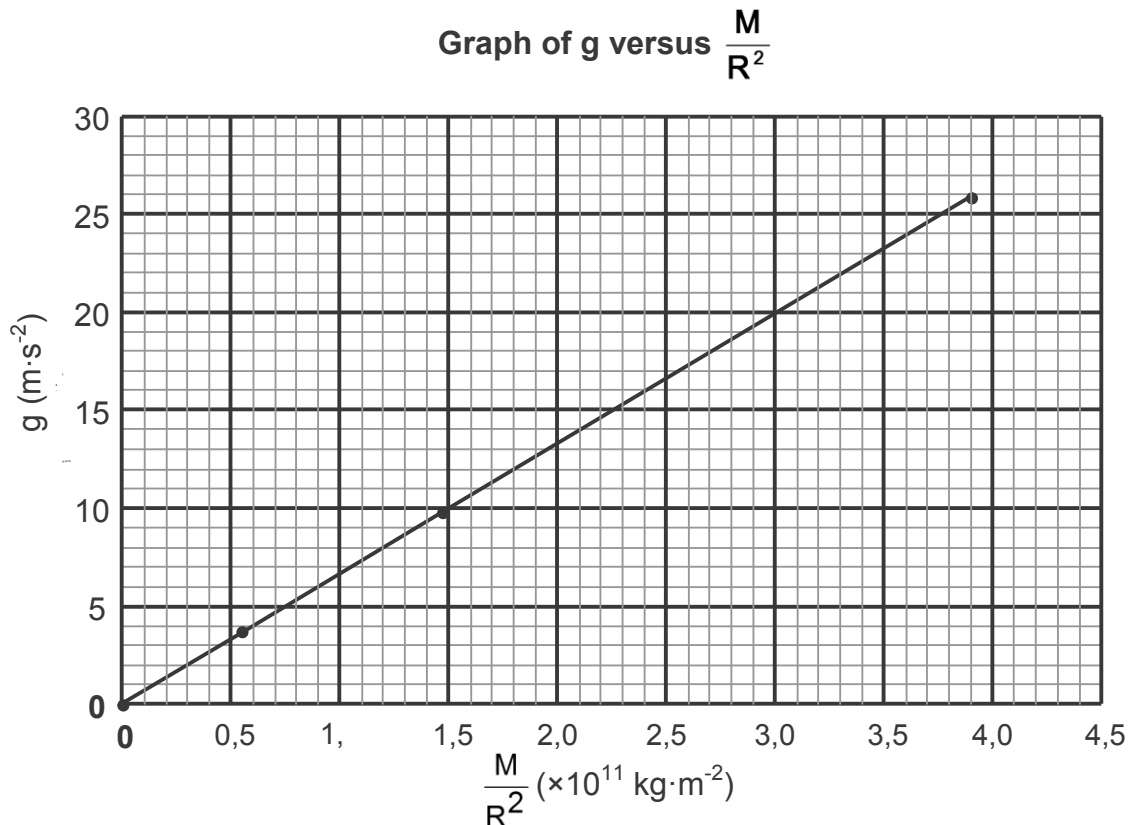
When the 6 kg block is released, it accelerates to the right and experiences a kinetic frictional force of 24 N. Ignore the effects of air friction.

- | | | |
|-----|--|-----|
| 4.1 | State <i>Newton's Second Law of Motion</i> in words. | (2) |
| 4.2 | Draw a labelled free-body diagram showing ALL the forces acting on the 6 kg block. | (4) |
| 4.3 | Calculate the magnitude of the acceleration of the 3 kg block. | (6) |
| 4.4 | Explain the following statement: | |
| | The acceleration of an object is $0,6 \text{ m}\cdot\text{s}^{-2}$. | (2) |
- [14]**

QUESTION 5 (Start on a new page.)

The relationship between gravitational acceleration and the ratio of the mass to the square of the radius ($\frac{M}{R^2}$) of different planets are investigated.

The graph below is obtained from the data collected.

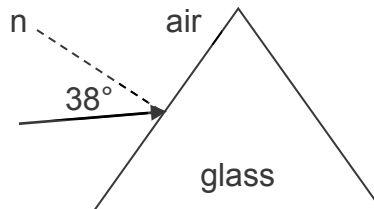


- 5.1 What relationship between g and $\frac{M}{R^2}$ can be deduced from the graph? (1)
- 5.2 Calculate the gradient of the graph. (3)
- 5.3 Which physical constant is represented by the gradient of the graph? (1)
- 5.4 The gravitational acceleration on Uranus is $9 \text{ m}\cdot\text{s}^{-2}$. Use the graph to determine the $\frac{M}{R^2}$ value for Uranus. (2)
- 5.5 Calculate the mass of Uranus if the radius is $2,54 \times 10^7 \text{ m}$. (2)
- [9]**



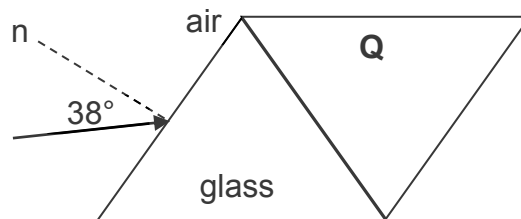
QUESTION 6 (Start on a new page.)

A light ray is incident on a glass prism. The angle of incidence is 38° , as shown below. The refractive index of glass is 1,5 and that of air is 1.



- 6.1 Define the term *angle of refraction*. (2)
- 6.2 Calculate the angle of refraction inside the glass prism. (3)
- 6.3 Redraw the glass prism in the ANSWER BOOK. Complete the path of the light ray inside the prism and label the angle of refraction. (2)

A second prism, **Q**, of unknown material, is now placed next to the glass prism, as shown in the diagram below.



The light ray travels from the glass prism and enters prism **Q** at an angle of incidence of 36° . The angle of refraction inside prism **Q** is 41° .

- 6.4 Calculate the refractive index of prism **Q**. (2)
- 6.5 How does the speed of light in the glass prism compare to the speed of light in prism **Q**? Write only GREATER THAN, SMALLER THAN or REMAINS THE SAME. (1)
- 6.6 Explain the answer to QUESTION 6.5 by referring to the refractive indices of the materials. (2)

The critical angle for the glass prism **Q** boundary is $63,3^\circ$. The angle of incidence when the light ray travels from the glass prism to prism **Q** is increased to 65° .

- 6.7 Define the term *critical angle*. (2)
- 6.8 What observation will be made? Briefly explain the answer. (3)


[17]

QUESTION 7 (Start on a new page.)

An experiment is set up to determine the relationship between the DEGREE OF DIFFRACTION and WAVELENGTH of light. Blue light is passed through a single slit and the pattern formed is observed.

The experiment is now repeated with green light and then with red light. The distance between the light source and the slit remains constant during the investigation.

The patterns obtained are shown in the diagram below.

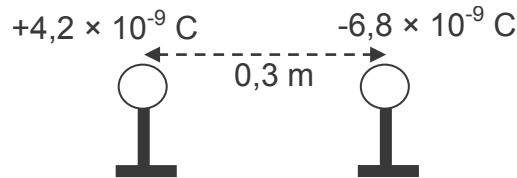


- 7.1 Define the term *wave front*. (2)
- 7.2 What nature of light is demonstrated by diffraction? (1)
- 7.3 For this experiment, write down:
- 7.3.1 ONE controlled variable (1)
- 7.3.2 The independent variable (1)
- 7.4 Fully explain the difference in the patterns observed. (4)
- 7.5 The experiment with red light is now repeated using a NARROWER slit.
- How will the broadness of the central band be affected? Write only INCREASES, DECREASES or REMAINS THE SAME. Give a reason for the answer. (2)

[11]

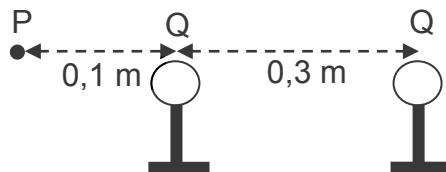
QUESTION 8 (Start on a new page.)

Two small identical metal spheres on insulated stands carry charges of $+4,2 \times 10^{-9} \text{ C}$ and $-6,8 \times 10^{-9} \text{ C}$ respectively. They are placed at a distance of 0,3 m apart.



- 8.1 State *Coulomb's law* in words. (2)
- 8.2 Calculate the magnitude of the electrostatic force that the one charge exerts on the other. (3)

The two spheres are allowed to touch and are then returned to their original positions.



- 8.3 Calculate the new charge **Q** on EACH sphere. (3)
- 8.4 Draw the electric field pattern between the two charged spheres. (2)
- 8.5 Calculate the magnitude of the net electric field at point **P** situated at 0,1 m to the left of the spheres, as shown in the diagram above. (5)
- [15]**

QUESTION 9 (Start on a new page.)

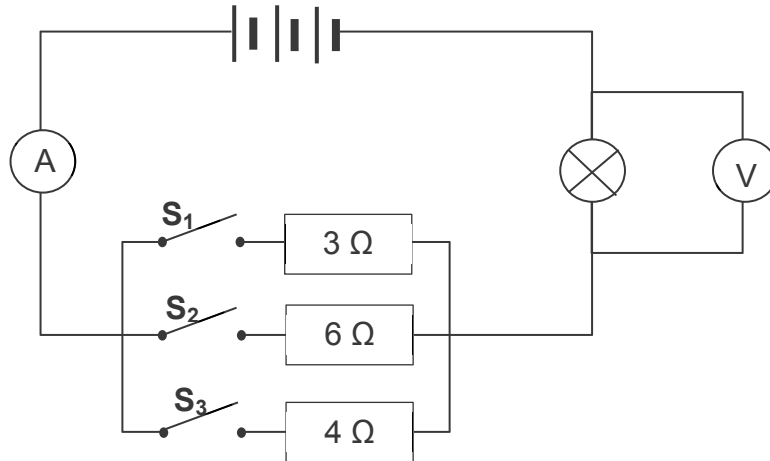
A coil with 200 windings and a surface area of $2,8 \times 10^{-3} \text{ m}^2$ is rotated at constant speed in a constant magnetic field of 2,5 T. An emf of 3,5 V is induced in the coil.

- 9.1 Consider the following statement: The magnitude of the induced emf across the ends of a conductor is directly proportional to the rate of change in the magnetic flux linkage with the conductor.
- Name the law represented by the above statement. (1)
- 9.2 Calculate the:
- 9.2.1 Change in magnetic flux if the angle of the coil relative to the magnetic field changes from 0° to 90° (3)
- 9.2.2 Time it takes the coil to rotate from 0° to 90° (3)
- 9.3 By what factor will the induced emf change if a coil with 100 windings is used under the same conditions? Give a reason for the answer. (2)
- [9]**



QUESTION 10 (Start on a new page.)

Three resistors, of resistances $3\ \Omega$, $4\ \Omega$ and $6\ \Omega$, and a bulb are connected in a circuit, as shown below. Initially all the switches, S_1 , S_2 and S_3 , are open. The internal resistance of the battery and the resistance of the connecting wires may be ignored.



10.1 State *Ohm's law* in words. (2)

Switch S_1 is now closed and the voltmeter and ammeter readings are recorded. The voltmeter and ammeter readings, when both switch S_1 and switch S_2 are closed, are then recorded, as well as the readings when all three switches, S_1 , S_2 and S_3 , are closed.

The results obtained are shown in the table below.

SWITCHES CLOSED	VOLTMETER READING (V)	AMMETER READING (A)
S_1	4,8	2,4
S_1 and S_2	6	3
S_1 , S_2 and S_3	7,2	3,6

10.2 Explain the increase in the ammeter reading as more switches are closed. (2)

10.3 Calculate the:

10.3.1 Resistance of the bulb (3)

10.3.2 Potential difference of the battery (4)

10.4 Define the term *power*. (2)

10.5 Calculate the power dissipated in the $6\ \Omega$ resistor when ONLY SWITCHES S_1 and S_2 are closed. (4)

10.6 How will the BRIGHTNESS of the bulb be affected as more switches in the circuit are closed? Write only INCREASES, DECREASES or REMAINS THE SAME. (1)

10.7 Explain the answer to QUESTION 10.6. (2)

[20]

TOTAL: 150



**DATA FOR PHYSICAL SCIENCES GRADE 11
PAPER 1 (PHYSICS)**

**GEGEWENS VIR FISIESTE WETENSAPPE GRAAD 11
VRAESTEL 1 (FISIKA)**

TABLE 1: PHYSICAL CONSTANTS/TABEL 1: FISIESTE KONSTANTES

NAME/NAAM	SYMBOL/SIMBOOL	VALUE/WAARDE
Acceleration due to gravity <i>Swaartekragversnelling</i>	g	9,8 m·s ⁻²
Gravitational constant <i>Swaartekragkonstante</i>	G	6,67 x 10 ⁻¹¹ N·m ² ·kg ⁻²
Radius of Earth <i>Straal van die Aarde</i>	R _E	6,38 x 10 ⁶ m
Coulomb's constant <i>Coulomb se konstante</i>	k	9,0 x 10 ⁹ N·m ² ·C ⁻²
Speed of light in a vacuum <i>Spoed van lig in 'n vakuum</i>	c	3,0 x 10 ⁸ m·s ⁻¹
Charge on electron <i>Lading op elektron</i>	e	-1,6 x 10 ⁻¹⁹ C
Electron mass <i>Elektronmassa</i>	m _e	9,11 x 10 ⁻³¹ kg
Mass of Earth <i>Massa van die Aarde</i>	M _E	5,98 x 10 ²⁴ kg

TABLE 2: FORMULAE/TABEL 2: FORMULES

MOTION/BEWEGING

$v_f = v_i + a \Delta t$	$\Delta x = v_i \Delta t + \frac{1}{2} a \Delta t^2$
$v_f^2 = v_i^2 + 2a \Delta x$	$\Delta x = \left(\frac{v_f + v_i}{2} \right) \Delta t$

FORCE/KRAG

$F_{\text{net}} = ma$	$w = mg$
$F = \frac{Gm_1m_2}{r^2}$	$\mu_s = \frac{f_{s(\text{max/ maks})}}{N}$
$\mu_k = \frac{f_k}{N}$	



WAVES, SOUND AND LIGHT/GOLWE, KLANK EN LIG

$v = f \lambda$	$T = \frac{1}{f}$
$n_i \sin \theta_i = n_r \sin \theta_r$	$n = \frac{c}{v}$

ELECTROSTATICS/ELEKTROSTATIKA

$F = \frac{kQ_1Q_2}{r^2}$ (k = 9,0 x 10 ⁹ N·m ² ·C ⁻²)	$E = \frac{F}{q}$
$E = \frac{kQ}{r^2}$ (k = 9,0 x 10 ⁹ N·m ² ·C ⁻²)	$n = \frac{Q}{e}$

ELECTROMAGNETISM/ELEKTROMAGNETISME

$\varepsilon = -N \frac{\Delta \Phi}{\Delta t}$	$\Phi = BA \cos \theta$
---	-------------------------

ELECTRIC CIRCUITS/ELEKTRIESE STROOMBANE

$I = \frac{Q}{\Delta t}$	$R = \frac{V}{I}$
$\frac{1}{R} = \frac{1}{r_1} + \frac{1}{r_2} + \frac{1}{r_3} + \dots$	$R = r_1 + r_2 + r_3 + \dots$
$W = Vq$ $W = VI \Delta t$ $W = I^2 R \Delta t$ $W = \frac{V^2 \Delta t}{R}$	$P = \frac{W}{\Delta t}$ $P = VI$ $P = I^2 R$ $P = \frac{V^2}{R}$





basic education

Department:
Basic Education
REPUBLIC OF SOUTH AFRICA

**NATIONAL
SENIOR CERTIFICATE/
NASIONALE
SENIOR SERTIFIKAAT**

GRADE/GRAAD 11

**PHYSICAL SCIENCES: PHYSICS (P1)
FISIESE WETENSKAPPE: FISIKA (V1)**

NOVEMBER 2019

MARKING GUIDELINES/NASIENRIGLYNE

MARKS/PUNTE: 150

**These marking guidelines consist of 13 pages./
Hierdie nasienriglyne bestaan uit 13 bladsye.**

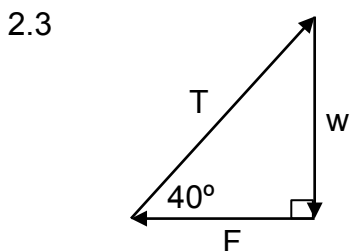
QUESTION 1/VRAAG 1

- | | | |
|------|------|-------------|
| 1.1 | B ✓✓ | (2) |
| 1.2 | C ✓✓ | (2) |
| 1.3 | A ✓✓ | (2) |
| 1.4 | B ✓✓ | (2) |
| 1.5 | B ✓✓ | (2) |
| 1.6 | C ✓✓ | (2) |
| 1.7 | D ✓✓ | (2) |
| 1.8 | B ✓✓ | (2) |
| 1.9 | A ✓✓ | (2) |
| 1.10 | D ✓✓ | (2) |
| | | [20] |

QUESTION 2/VRAAG 2

2.1 $F_{net} = 0$ /Object in equilibrium/Resultant is zero ✓✓
 $F_{net} = 0$ /Voorwerp in ewewig/Resultant is nul. (2)

2.2 $w = mg$
 $= (15)(9,8)$ ✓
 $= 147 \text{ N}$ ✓ (2)



Accepted Labels/Aanvaarbare byskrifte		Mark/Punt
w	weight/ F_g / F <i>gewig/gravitasiekrag/swaartekrag</i>	✓
F	Applied force/ F / F_A <i>Toegepaste krag</i>	✓
T	Tension/ T / <i>Spanning</i>	✓
	Any angle correctly shown (40° or 50° or 90°) <i>Enige hoek korrek aangedui (40° of 50° of 90°)</i>	✓
	Triangle not closed/ <i>Driehoek nie geslote nie: Max./maks.</i> $\frac{3}{4}$	

(4)

2.4 **POSITIVE MARKING FROM QUESTION 2.2.**
POSITIEWE NASIEN VANAF VRAAG 2.2.

<u>OPTION 1/OPSIE 1</u>	<u>OPTION 2/OPSIE 2</u>
$T = \frac{w}{\sin 40^\circ}$	$T = \frac{w}{\cos 50^\circ}$
$= \frac{147}{\sin 40^\circ}$ ✓	$= \frac{147}{\cos 50^\circ}$ ✓
$= 228,69 \text{ N}$ ✓	$= 228,69 \text{ N}$ ✓

(2)

2.5 The two forces act on the same object (the billboard). ✓
 (For the Newton's third law, the forces act on different objects.)

Die twee kragte werk op dieselfde voorwerp (die bord) in.
(Vir Newton se derde wet moet die kragte op verskillende voorwerpe inwerk.)

(1)
[11]

QUESTION 3/VRAAG 3

3.1

Marking guidelines/Nasienriglyne

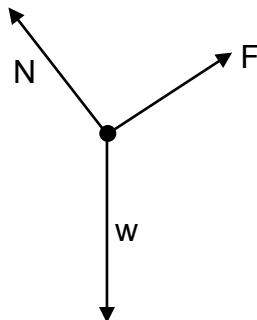
If any of the underlined key words/phrases are omitted: minus 1 mark
Indien enige van die onderstreepte sleutelwoorde/frases uitgelaat is: minus 1 punt

A body will remain in its state of rest or motion at constant velocity unless a non-zero resultant/net force acts on it. ✓✓

'n Liggaam sal in sy toestand van rus of beweging teen konstante snelheid volhard tensy 'n nie-nul resulterende/netto krag daarop inwerk.

(2)

3.2



Accepted Labels/Aanvaarbare byskrifte		
w	weight/ F_G/F_g <i>gewig/gravitasiekrag/swaartekrag</i>	✓
N	Normal force/ F_N / <i>Normaalkrag/F_N</i>	✓
F	Force applied/ F / F_A / <i>Toegepaste krag</i>	✓
Any additional forces/ <i>Enige addisionele kragte</i> : Max./maks. $\frac{2}{3}$		
If arrows do NOT touch object/ <i>Indien pyle NIE voorwerp raak</i> NIE: Max./maks. $\frac{2}{3}$		

(3)

3.3.

3.3 $F_{g\perp} = mg \cos \theta$ ✓
 $= (4)(9,8) \cos 30^\circ$ ✓
 $= 33,95 \text{ N}$ ✓

(3)

3.3.2 $F_{\text{net}} = ma$ } ✓ Any one/*Enige een*
 $F - F_{g\parallel} = 0$ }
 $F - (4)(9,8) \sin 30^\circ = 0$ ✓
 $= 19,6 \text{ N}$ ✓

(3)

3.4

3.4.1
$$\left. \begin{array}{l} F_{\text{net}} = ma \\ F - f_k - F_{g\parallel} = ma \end{array} \right\} \checkmark \text{ Any one/Enige een}$$
$$\underline{25 - f_k - 4(9,8)\sin 30^\circ} \checkmark = 4(0,2) \checkmark$$
$$f_k = 4,6 \text{ N} \checkmark$$

(4)

3.4.2 **POSITIVE MARKING FROM QUESTION 3.3.1 and 3.4.1.**
POSITIEWE NASIEN VANAF VRAAG 3.3.1 en 3.4.1.

$$f_k = \mu_k N \checkmark$$
$$4,6 = \mu_k(33,95) \checkmark$$
$$\mu_k = 0,135 \checkmark$$

(3)

3.5

3.5.1 Same in magnitude \checkmark and same in direction \checkmark
Dieselfde grootte en dieselfde rigting

(2)

3.5.2 Increase in magnitude \checkmark and opposite direction \checkmark
Toeneem in grootte en teenoorgestelde rigting

(2)

3.5.3 Same in magnitude \checkmark and opposite direction \checkmark
Dieselfde grootte en teenoorgestelde rigting

(2)

[24]

QUESTION 4/VRAAG 4

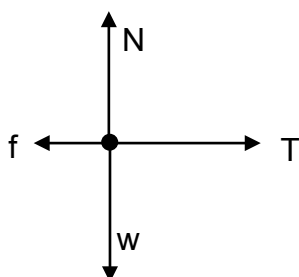
4.1

Marking guidelines/Nasienriglyne
 If any of the underlined key words/phrases are omitted: minus 1 mark
Indien enige van die onderstreepte sleutelwoorde/frases uitgelaat is: minus 1 punt

When a resultant/net force act on an object, the object will accelerate in the direction of the force at an acceleration directly proportional to the force and inversely proportional to the mass of the object. ✓✓
Wanneer 'n resulterende/netto krag op 'n voorwerp inwerk, sal die voorwerp in die rigting van die krag versnel teen 'n versnelling direk eweredig aan die krag en omgekeerd eweredig aan die massa van die voorwerp.

(2)

4.2



(4)

Accepted Labels/Aanvaarbare byskrifte		
w	weight/ F_g /gewig/gravitasiekrag/swaartekrag	✓
N	Normal force/ F_N /Normaalkrag/ F_N	✓
T	Tension/Spanning	✓
f	Friction/ F_f /Wrywing	✓
Any additional force/Enige addisionele krag: Max./maks. $\frac{3}{4}$		
If arrows do NOT touch object/Indien pyle NIE voorwerp raak NIE: Max./maks. $\frac{3}{4}$		

(4)

4.3

6 kg block/blok:

$$F_{net} = ma \checkmark$$

$$T - f_k = ma$$

$$T - 24 \checkmark = 6a \checkmark$$

$$T = 6a + 24 \dots\dots(1)$$

3 kg block/blok:

$$F_{net} = ma$$

$$F_g - T = ma$$

$$(3)(9,8) - T \checkmark = 3a \dots\dots(2)$$

Substitute (1) into (2)/Vervang (1) in (2):

$$29,4 - (6a + 24) = 3a \checkmark$$

$$a = 0,6 \text{ m}\cdot\text{s}^{-2} \checkmark$$

Marking guidelines/Nasienriglyne

- Formule/Formule: $F_{net} = ma \checkmark$
- $T - F_k = T - 24 \checkmark$
- $F_g - T = 3(9,8) - T \checkmark$
- $3a$ **OR/OF** $6a \checkmark$
- Equating two equations or substitute one into the other/Stel twee vergelykings gelyk aan mekaar of vervang die een in die ander. ✓
- Final answer/Finale antwoord: $0,6 \text{ m}\cdot\text{s}^{-2} \checkmark$

(6)

4.4

The velocity changes with $0,6 \text{ m}\cdot\text{s}^{-1}$ during every second. ✓✓
Die snelheid verander met $0,6 \text{ m}\cdot\text{s}^{-1}$ gedurende elke sekonde

(2)

QUESTION 5/VRAAG 5

5.1 g is directly proportional to $\frac{M}{R^2}$. ✓

g is direk eweredig aan $\frac{M}{R^2}$.

(1)

5.2 Any two points from the graph can be used for example:
Enige twee punte vanaf die grafiek kan gebruik word byvoorbeeld:

$$\text{Gradient} = \frac{9 - 0}{1,35 \times 10^{11} - 0} = 6,67 \times 10^{-11}$$

OR/OF

$$\text{Gradient} = \frac{10 - 0}{1,5 \times 10^{11} - 0} = 6,67 \times 10^{-11}$$

OR/OF

$$\text{Gradient} = \frac{20 - 0}{3 \times 10^{11}} = 6,67 \times 10^{-11}$$

(3)

5.3 G / Gravitational constant ✓
 G / Gravitاسie konstante

(1)

5.4 $1,35 \times 10^{11} \text{ (kg}\cdot\text{m}^{-2})$ ✓✓
 Range/Gebied: $1,34 - 1,36 \times 10^{11} \text{ (kg}\cdot\text{m}^{-2})$

(2)

5.5 **POSITIVE MARKING FROM QUESTION 5.4.**
POSITIEWE NASIEN VANAF VRAAG 5.4.

<u>OPTION 1/OPSIE 1</u>	<u>OPTION 2/OPSIE 2</u>
$\frac{M}{R^2} = 1,35 \times 10^{11}$	$g = \frac{GM}{R^2}$
$\frac{M}{(2,54 \times 10^7)^2} = 1,35 \times 10^{11} \checkmark$	$g = \frac{6,67 \times 10^{-11} M}{(2,54 \times 10^7)^2} \checkmark$
$M = 8,71 \times 10^{25} \text{ kg} \checkmark$ $(8,7097 \times 10^{25} \text{ kg})$	$M = 8,71 \times 10^{25} \text{ kg} \checkmark$ $(8,705 \times 10^{25} \text{ kg})$

(2)
[9]

QUESTION 6/VRAAG 6

6.1

Marking guidelines/Nasienriglyne

If any of the underlined key words/phrases are omitted: minus 1 mark
Indien enige van die onderstreepte sleutelwoorde/frases uitgelaat is: minus 1 punt

The angle between the normal to a surface and the refracted light ray. ✓✓
Die hoek tussen die normaal op die oppervlak en die gebreekte ligstraal.

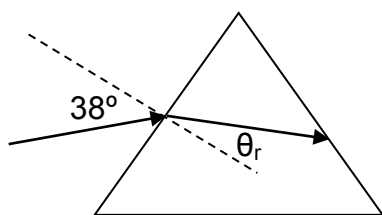
(2)

6.2

$$n_i \sin \theta_i = n_r \sin \theta_r \quad \checkmark$$
$$1 \sin 38^\circ = 1,5 \sin \theta_r \quad \checkmark$$
$$\theta_r = 24,23^\circ \quad \checkmark$$

(3)

6.3



Marking criteria/Nasienriglyne:

- Light ray bends towards normal. ✓
Ligstraal breek na normaal toe.
- Angle of refraction correctly shown. ✓
Brekingshoek korrek aangetoon.

(2)

6.4

$$n_i \sin \theta_i = n_r \sin \theta_r$$
$$1,5 \sin 36^\circ = n_r \sin 41^\circ \quad \checkmark$$
$$n_r = 1,34 \quad \checkmark$$

(2)

6.5

Smaller than ✓
Kleiner as

(1)

6.6

For a constant speed of light, c, ✓
the refractive index is inversely proportional to the speed of light in the medium (v). ✓
Therefore, the higher the refractive index, the lower the speed (v).

Vir 'n konstante spoed van lig, c,
is die brekingsindeks omgekeerd eweredig aan die spoed van lig in die medium (v).

Dus, hoe groeter die brekingsindeks, hoe kleiner die spoed (v).

(2)

6.7

The angle of incidence when the angle of refraction is 90°. ✓✓
Die invalshoek wanneer die brekingshoek gelyk is aan 90°.

(2)

6.8

Total internal reflection occurs ✓
because the light ray passes from an optical denser to less dense medium ✓
and the angle of incidence is greater than the critical angle. ✓
Totale interne weerkaatsing vind plaas
omdat die ligstraal van 'n opties meer dig na minder digte medium beweeg
en die invalshoek is groter as die grenshoek.

(3)

[17]

QUESTION 7/VRAAG 7

7.1

Marking guidelines/Nasienriglyne

If any of the underlined key words/phrases are omitted: minus 1 mark

Indien enige van die onderstreepte sleutelwoorde/frases uitgelaat is:

minus 1 punt

A wave front is an imaginary line joining the points on a wave that are in phase. ✓✓

'n Golffront is 'n denkbeeldige lyn wat punte op 'n golf, wat in fase is, verbind. (2)

7.2

Wave nature ✓

Golfgeaardheid (1)

7.3.1

Slit width ✓

Spleetwydte (1)

7.3.2

Colour of light/Wavelength of light ✓

Kleur van lig/Golflengte van lig (1)

7.4

Wavelength increases from blue to red light. ✓

(Degree of) diffraction $\propto \frac{\lambda}{w}$ ✓

For the same slit width, ✓
degree of diffraction increases with wavelength. ✓

Golflengte neem toe van blou na rooi lig.

(Mate van) diffraksie $\propto \frac{\lambda}{w}$

*Vir dieselfde spleetwydte,
sal mate van diffraksie toeneem met langer golflengte.* (4)

7.5

Increases ✓

(Degree of) diffraction is inversely proportional to slit width ✓

Afneem

(Mate van) diffraksie is omgekeerd eweredig aan spleetwydte (2)

[11]

QUESTION 8/VRAAG 8

8.1

Marking guidelines/Nasienriglyne

If any of the underlined key words/phrases are omitted: minus 1 mark
Indien enige van die onderstreepte sleutelwoorde/frases uitgelaat is: minus 1 punt

The magnitude of the electrostatic force exerted by two point charges on each other is directly proportional to the product of the magnitudes of the charges ✓ and inversely proportional to the square of the distance between them. ✓

Die grootte van die elektrostatiese krag wat deur twee puntladings op mekaar uitgeoefen word, is direk eweredig aan die produk van die grootte van die ladings en omgekeerd eweredig aan die kwadraat van die afstand tussen hulle.

(2)

8.2

$$F = \frac{kQ_1Q_2}{r^2} \checkmark$$

$$= \frac{(9 \times 10^9)(4,2 \times 10^{-6})(6,8 \times 10^{-6})}{(0,3)^2} \checkmark$$

$$= 2,86 \text{ N} \checkmark$$

(3)

8.3

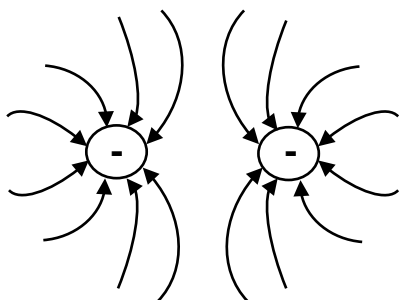
$$Q = \frac{Q_1 + Q_2}{2}$$

$$= \frac{4,2 \times 10^{-6} + (-6,8 \times 10^{-6})}{2} \checkmark$$

$$= -1,3 \times 10^{-6} \text{ C} \checkmark$$

(2)

8.4



Criteria for marking/Nasienkriteria	
Charges correctly indicated <i>Ladings korrek aangedui</i>	✓
Shape of the field <i>Vorm van veld</i>	✓
Direction of the field <i>Rigting van veld</i>	✓

NOTE/LET WEL:

IF lines don't touch charges or lines cross etc.

INDIEN lyne nir doe ladings raak nie of lyne kruis ens.

Max./maks. $\frac{2}{3}$

(3)

8.5 **POSITIVE MARKING FROM QUESTION 8.4.**
POSITIEWE NASIEN VANAF VRAAG 8.4.

$$E = \frac{kQ}{r^2} \checkmark$$
$$= \frac{(9 \times 10^9)(1,3 \times 10^{-6})}{0,4^2} \checkmark$$
$$= 73125 \text{ N} \cdot \text{C}^{-1} \text{ right}$$

$$E = \frac{(9 \times 10^9)(1,3 \times 10^{-6})}{0,1^2} \checkmark$$
$$= 1170000 \text{ N} \cdot \text{C}^{-1} \text{ right}$$

$$E_{\text{net}} = 73\,125 + 1\,170\,000 \checkmark$$
$$= 1\,243\,125 \text{ N} \cdot \text{C}^{-1} \checkmark$$

(5)
[15]

QUESTION 9/VRAAG 9

9.1 Faraday's law of electromagnetic induction ✓
Faraday se wet van elektromagnetiese induksie

(1)

9.2.1 $\Delta\Phi = \Delta BA \cos \theta \checkmark$
 $= (2,8 \times 10^{-3})(2,5)(\cos 90^\circ - \cos 0^\circ) \checkmark$
 $= -0,007 \text{ Wb} \checkmark$

(3)

9.2.2 **POSITIVE MARKING FROM QUESTION 9.2.1.**
POSITIEWE NASIEN VANAF VRAAG 9.2.1.

$$\varepsilon = -\frac{N\Delta\phi}{\Delta t} \checkmark$$
$$3,5 = -\frac{200(-0,007)}{\Delta t} \checkmark$$

$$\Delta t = 0,4 \text{ s} \checkmark$$

(3)

9.3 Emf will be halve/two times smaller ✓
Emf is directly proportional to number of windings ✓

Emk sal die helfte wees/twee keer kleiner
Emk is direk eweredig aan die aantal windings

(2)
[9]

QUESTION 10/VRAAG 10

10.1

Marking guidelines/Nasienriglyne

If any of the underlined key words/phrases are omitted: minus 1 mark
Indien enige van die onderstreepte sleutelwoorde/frases uitgelaat is: minus 1 punt

The potential difference across a conductor is directly proportional to the current in the conductor at constant temperature. ✓✓
Die potensiaalverskil oor die ente van 'n geleier is direk eweredig aan die stroom in die geleier by konstante temperatuur.

(2)

10.2

More resistors connected in parallel. ✓
Therefor the effective resistance of the circuit decreases. ✓

Meer resistors verbind in parallel.

Daarom neem die effektiewe weerstand van die stroombaan af.

(2)

10.3

10.3.1

Any set of values from the table can be used for example:
Enige stel waardes vanaf die tabel kan gebruik word byvoorbeeld:

$$R = \frac{V}{I} \checkmark$$

$$= \frac{4,8}{2,4} \checkmark$$

$$= 2 \Omega \checkmark$$

(3)

10.3.2

POSITIVE MARKING FROM QUESTION 10.3.1.
POSITIEWE NASIEN VANAF VRAAG 10.3.1.

OPTION 1/OPSIE 1

Switched 1 closed:
Skakelaar 1 gesluit:

$$R_{tot} = 3 + 2 \checkmark$$

$$= 5 \Omega$$

$$V_{emf} = IR_{tot} \checkmark$$

$$= (2,4)(5) \checkmark$$

$$= 12 V \checkmark$$

OPTION 2/OPSIE 2

Switches 1 and 2 closed:
Skakelaar 1 en 2 gesluit:

$$\frac{1}{R_p} = \frac{1}{R_1} + \frac{1}{R_2}$$

$$= \frac{1}{3} + \frac{1}{6}$$

$$R_p = 2 \Omega$$

$$R_{tot} = 2 + 2 \checkmark = 4 \Omega$$

$$V_{emf} = IR_{tot} \checkmark$$

$$= (3)(4) \checkmark$$

$$= 12 V \checkmark$$

OPTION 3/OPSIE 3

Switches 1, 2 and 3 closed:
Skakelaar 1, 2 en 3 gesluit

$$\frac{1}{R_p} = \frac{1}{R_1} + \frac{1}{R_2} + \frac{1}{R_3}$$

$$= \frac{1}{3} + \frac{1}{6} + \frac{1}{4}$$

$$R_p = 1,33 \Omega$$

$$R_{tot} = 1,33 + 2 \checkmark = 3,33 \Omega$$

$$V_{emf} = IR_{tot} \checkmark$$

$$= (3,6)(3,33) \checkmark$$

$$= 12 V \checkmark$$

(4)

10.4 Power is the rate at which work is done or energy is transferred. ✓✓
 Drywing is die tempo waarteen arbeid verrig word of energie oorgedra word. (2)

10.5

POSITIVE MARKING FROM QUESTION 10.3.1 AND 10.3.2. POSITIEWE NASIEN VANAF VRAAG 10.3.1 EN 10.3.2. $V_{ } = V_{emf} - V_{series}$ $= 12 - 6 \checkmark$ $= 6 V$		
OPTION 1/OPSIE 1 $P = \frac{V_{ }^2}{R} \checkmark$ $= \frac{6^2}{6} \checkmark$ $= 6 W \checkmark$	OPTION 2/OPSIE 2 $I = \frac{V}{R}$ $I = \frac{6}{6}$ $= 1A$ $P = VI \checkmark$ $= 6(1) \checkmark$ $= 6 W \checkmark$	OPTION 3/OPSIE 3 $I = \frac{V}{R}$ $I = \frac{6}{6}$ $= 1A$ $P = I^2R \checkmark$ $= 1^2(6) \checkmark$ $= 6 W \checkmark$

(4)

10.6 Increase/ *Neem toe* ✓

(1)

10.7 (As more resistors are connected in parallel, the effective resistance decreases and the current increases.)

From $P = I^2R$, power is directly proportional to I^2 ✓if R (of the bulb) stays constant.

Increase in power increases brightness. ✓

(Soos meer resistors in parallel verbind word, neem die effektiewe weerstand af en die stroom neem toe.)

Volgens $P = I^2R$ is die drywing direk eweredig aan I^2 indien R (van die gloeilamp) konstant bly.

Toename in drywing verhoog helderheid. ✓

(2)

[20]

TOTAL: 150